

Daily Mental Math

Grade

2

2nd EDITION













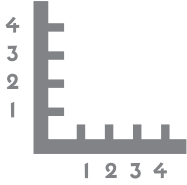












MONDAY

TUESDAY

WEDNESDAY

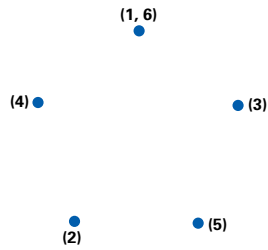
THURSDAY

FRIDAY

MONDAY

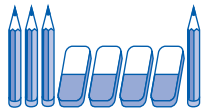
1. Connect the dots.




2. About how many of your hands will cover this page?



Check it.




3. How many  ?



4. How many  ?




5. How many altogether? 

6. Take away 2  .


How many erasers are left? 

7. Take away 2  .

How many pencils are left? 

8. Color every second .



9. How many are colored? 

10. How many are not? 

TUESDAY

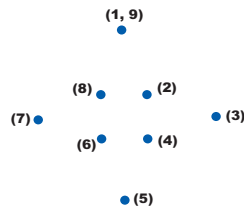


1. How many  ? 

2. How many  ? 

3. How many altogether? 

4. Connect the dots.



5. About how many of your little fingers would fit across the page?



Check it.

6. How many will fit down the page?




Check it.

7. How many  ? 



8. Color every second  .


9. How many are colored? 



10. 1, 2, 3, 4,  , 6, 7, 8, 9, 10

WEDNESDAY

1. Color every second .



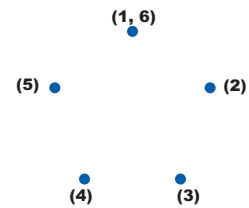
2. How many are not colored? 

3. How many?  

4. How many?  

5. How many altogether? 

6. Connect the dots.



7. About how many of your thumbs will fit across the page?



Check it.

8. How many  ? 



9. 1, 2, 3, 4, 5, 6, 7, 8,



, 10

10. Circle the shape that does not belong.



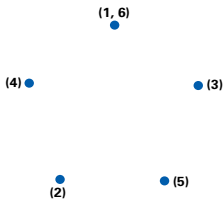
THURSDAY



- How many ?
- How many ?
- How many altogether?

- 1, 2, 3, 4, 5, , 7, 8, 9, 10

- Connect the dots.



- Circle the shape that does not belong.



- About how many times will your nose fit across the page?



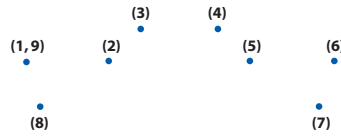
Check it.



- Take 4 dots away. How many are left?
- Take 5 dots away. How many are left?
- Take 3 dots away. How many are left?

FRIDAY


- Connect the dots.



- About how many times will one of your ears fit down the page?



Check it.



- How many elephants?
- How many mice?
- How many altogether?

- Color every second .



- How many are colored?



- How many are not?

- 1, 2, 3, 4, 5, 6, 7, 8, 9,



- Circle the shape that does not belong.



ASSESSMENT

How did you do?

Monday out of 10

Tuesday out of 10

Wednesday out of 10

Thursday out of 10

Friday out of 10

Plot your scores on the graph.

10					
9					
8					
7					
6					
5					
4					
3					
2					
1					
	Monday	Tuesday	Wednesday	Thursday	Friday


Day of the week

My teacher says

MONDAY

1. o'clock 


2. Write the numeral four.

3. Connect the dots.



4. What day was yesterday?

5. Is your hand bigger or the same size as your face?

6. How many eyes does the eye monster have?



7. How many faces?





8. Color every second

9. How many are colored?


10. How many are not?

TUESDAY

1. o'clock 

2. Circle the shape that does not belong.



3. Write the numeral six.

4. Connect the dots.


5. What day is it tomorrow?

6. About how many of your hands will cover the area of your desk?

7. If the eye monster shut four eyes, how many would be left open?



8. Color every second


9. How many are colored?

10. How many are not?

WEDNESDAY

1. o'clock 

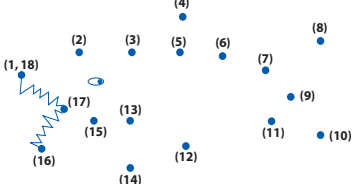
2. How many eyes are shut?




3. How many are open?

4. How many eyes altogether?

5. Write the numeral three.

6. Connect the dots.


7. What day is it tomorrow?

8. Color every second face.


9. How many are colored in?

10. How many are not?

THURSDAY

1. o'clock 

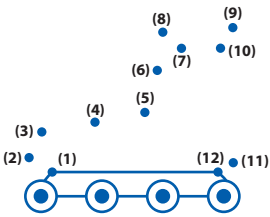
2. Are there more ★ or ◆?



3. 1, 2, 3,

4. Write the numeral ten.

5. Connect the dots.



6. What day was it yesterday?

7. Add 3 to 3.

8. 
Take 4  away.

How many are left?

9. 
Take 2  away.


How many are left?

10. 

Take 3  away.

How many are left?

FRIDAY

1. o'clock 

2. Circle the shape that does not belong.



3. 1, 2, 3, 4, 5,

4. Write the numeral nine.

5. What day is it tomorrow?

6. Is your hand:

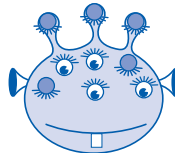
longer than

shorter than

about the same as

your pencil?

7. How many eyes are shut?



8. How many are open?

9. 

Take 2  away.

How many are left?

10.  add  = 3, so

 add  =

ASSESSMENT

How did you do?

On Monday I scored

out of 10



On Tuesday I scored

out of 10



On Wednesday I scored

out of 10



On Thursday I scored

out of 10



On Friday I scored

out of 10



My teacher says