

Daily Mental Math

Grade

3

2nd EDITION













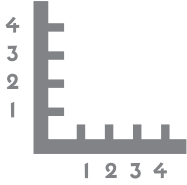












MONDAY

TUESDAY

WEDNESDAY


THURSDAY

FRIDAY

MONDAY

1. Connect the dots.




2.  o'clock

3. $3 + 2 =$

4. What day was yesterday?

5. $2 + 3 =$

6. $9 - 3 =$



Add 2 to 5.

8. 2, 4, 6, 8,

9. How many lots of 2 are there?

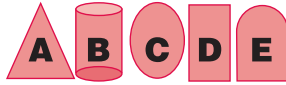


10. $2 + 2 + 2 =$

TUESDAY

1.  o'clock

2. Circle the shape that does not belong.



3. What year is it?

4. $2 + 2 =$

5. $4 + 1 =$

6. $8 - 5 =$



Add 3 to 5.

8. Write the numeral twenty.

9. Circle in groups of 3.



10. How many groups of three?

WEDNESDAY

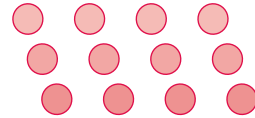
1. $3 + 3 =$



Add 4 to 5.

3. Write the numeral twenty-nine.

4. How many lots of 3?



5. How many fish did Luke catch altogether if he had 4 in his bucket and 5 in his net?

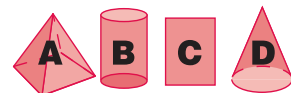
fish



6. $9 - 2 =$

7. $5 + 0 =$

8. Circle the shape that does not belong.



9. What year was it last year?

10.  o'clock

THURSDAY



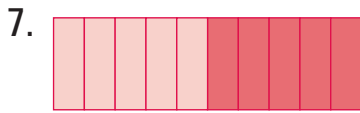
2. How many days in a week do you go to school?



4. $4 + 4 =$

5. $5 + 1 =$

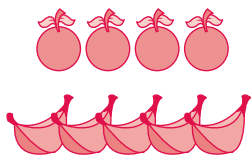
6. $9 - 6 =$



Add 5 to 5.

8. Write the number before 20.

9. If a hungry boy ate 5 bananas and 4 apples for lunch, how many pieces of fruit did he eat?



10. $2 + 4 =$

FRIDAY

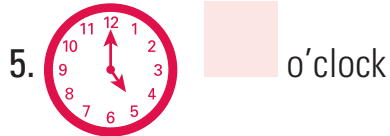
1. Circle the shape that is a square.



2. How many days are in a week?

3. $5 + 5 =$

4. $4 + 2 =$



6. $9 - 4 =$

7. Write the number before thirty.

8.

Share between your sister and brother. How much do they each get?

9. 1, 2, 3, 4, 5, 6,

, 8

10. $10 - 5 =$

ASSESSMENT

How did you do?

Monday out of 10

Tuesday out of 10

Wednesday out of 10

Thursday out of 10

Friday out of 10

Plot your scores on the graph.

10					
9					
8					
7					
6					
5					
4					
3					
2					
1					
	Monday	Tuesday	Wednesday	Thursday	Friday

Day of the week

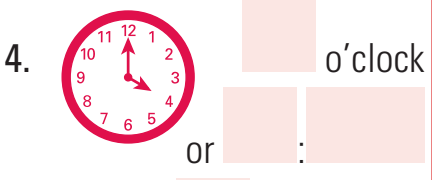
My teacher says

MONDAY



2. $8 + 2 =$

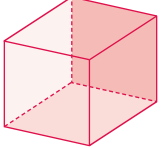
3. $2 + 8 =$




5. $10 - 2 =$

6. What do we call the part of the day after noon?


7. How many vertices (corners) on this cube?



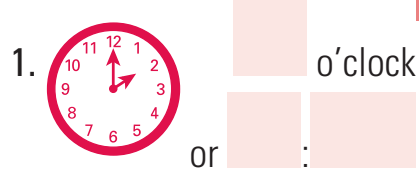
8. If you eat 3 apples in the morning and 5 apples in the afternoon, how many apples do you eat altogether?
 apples



9. $2 + 2 + 2 + 2 =$

10. 
How many lots of 2 are there?

TUESDAY



2. $7 + 3 =$

3. $3 + 7 =$


4. Is dusk when the sun rises or when the sun sets?

5. $10 - 7 =$

6. Write the number after 29.

7. $2 + 2 + 2 + 2 + 2 =$

8. Is midnight when it is dark or is it lunchtime?
dark
lunchtime

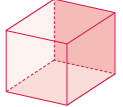


How many lots of 2 are there?

10. Share 4 bananas between you and your teacher. How many each?
 bananas

WEDNESDAY

1. This cube needs painting. How many faces are there to paint?



2. $4 + 6 =$

3. $6 + 4 =$

4. Is dawn when the sun rises or when the sun sets?

5. $10 - 6 =$



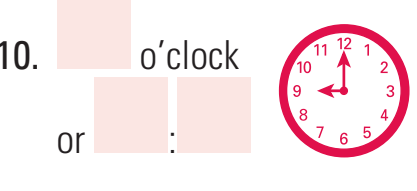
Share between you and a friend. How much do you each get?
 ¢

7. $3 + 3 + 3 =$

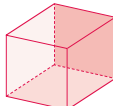
8. How many lots of 3 stars?




9. Take 3 stars away. How many are left?



THURSDAY

1. If your teacher gave you straws to make this cube, how many would you need?
- 

Hint: The straws would make up the edges.

2.  o'clock
or :

3. What month is it?

4. What was last month?

5. $10 + 0 =$

6. $0 + 10 =$

7. $10 - 0 =$

8. Color every fourth number.
- | | | | | | | | | | | | |
|---|---|---|---|---|---|---|---|---|----|----|----|
| 1 | 2 | 3 | 4 | 5 | 6 | 7 | 8 | 9 | 10 | 11 | 12 |
|---|---|---|---|---|---|---|---|---|----|----|----|

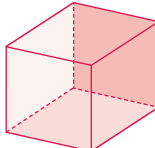
9. Write the numbers you colored.

, ,


10. 

Circle in groups of 4.
How many groups did you circle?

FRIDAY


1. The cube has:
0 
1
2
curved edges.

2. $3 + 3 + 3 + 3 =$

3. Take 3 away. How many are left?
 

4. $9 + 1 =$

5. $1 + 9 =$


6.  o'clock
or :

7. $10 - 9 =$

8. Share between 2 people.
How much do they each get?



9. Which bucket is heavier?
A B



10. Write the numeral twenty-one.

ASSESSMENT

How did you do?

On Monday I scored

out of 10



On Tuesday I scored

out of 10



On Wednesday I scored

out of 10



On Thursday I scored

out of 10



On Friday I scored

out of 10



My teacher says