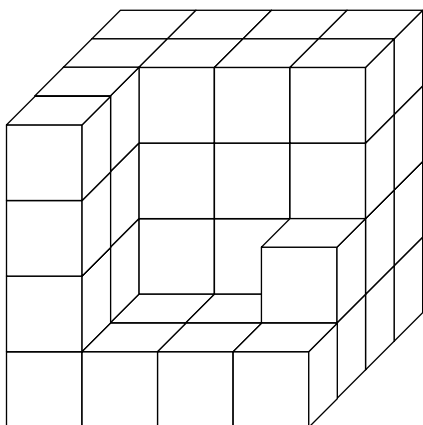


# Cube Models

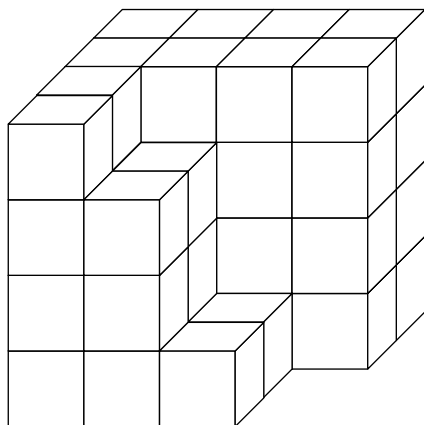
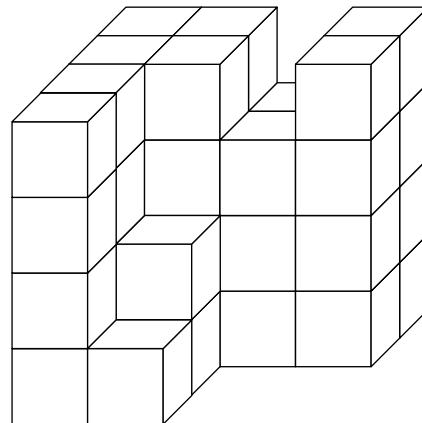


How many cubes did it take to make each of the models below?

**Model One:** \_\_\_\_\_ cubes



**Model Two:** \_\_\_\_\_ cubes



**Model Three:** \_\_\_\_\_ cubes

**Model Four:** \_\_\_\_\_ cubes

