




# Describing Shapes – 2




You could use a die or a box to help you answer these questions.

*Sidney Square has one face.*




How many faces does Colin Cube have?

*Remember to count the faces you cannot see.*



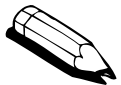
Very carefully, count how many sides (edges) and corners he has.




faces

sides (edges)

corners



Now describe Cathy Cuboid.



faces

sides (edges)

corners